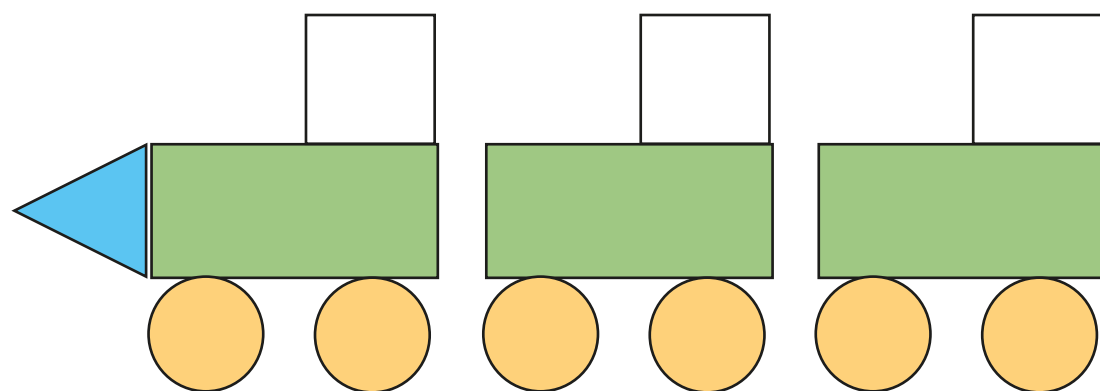


Draw pictograms (1–1)

1 Some children make a picture using shapes.



a) Complete the pictogram to show how many of each shape they have used.


Shape	
Square	
Rectangle	
Circle	
Triangle	

Key
X = 1 shape

b) What do you notice about the number of squares and the number of rectangles?

2 There are some animals in a zoo.

a) Complete the pictogram to show how many of each animal there are.



Animal	
Lion	
Elephant	
Giraffe	

Key
● = 1 animal





b) How did you complete the pictogram? Compare with a partner.


- 3 Pencils, rubbers and rulers have been mixed up in a tub.

The tally chart shows how many of each item there are.



















Item	Tally
pencils	IIII
rubbers	IIII IIII
rulers	IIII I

a) Use the tally chart to complete the pictogram.

Item	
Pencils	   
Rubbers	
Rulers	

Key
 = 1 item

b) Mo draws a pictogram for the same items. Here is his pictogram.

Item	
Pencils	   
Rubbers	       
Rulers	     

What mistakes has Mo made?


How could his pictogram be improved?





- 4 There are some flowers in a garden.

- There are 4 sunflowers.
- There is 1 less daffodil than there are sunflowers.
- There are twice as many daisies as daffodils.
- There is the same number of tulips as daffodils.

a) Complete the pictogram.

Key

 = 1 flower

Flower	
Sunflowers	   
Daffodils	
Daisies	
Tulips	

b) How many flowers are in the garden in total?