

# The 10 times-table

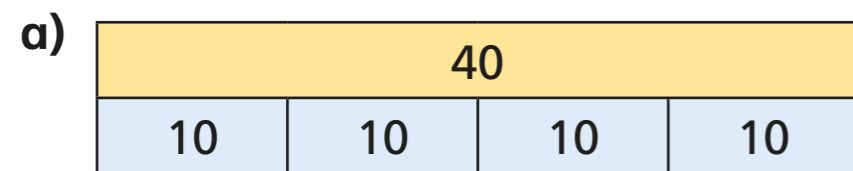
1 How many cookies are there?



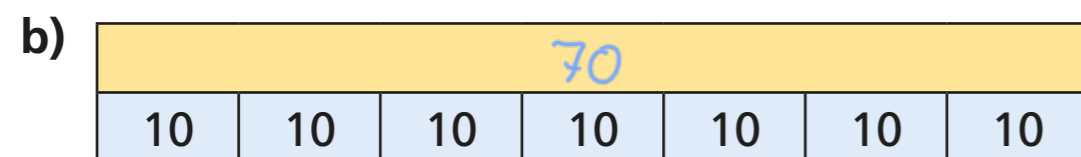
$$\boxed{6} \times 10 = \boxed{60}$$

There are  $\boxed{60}$  cookies.

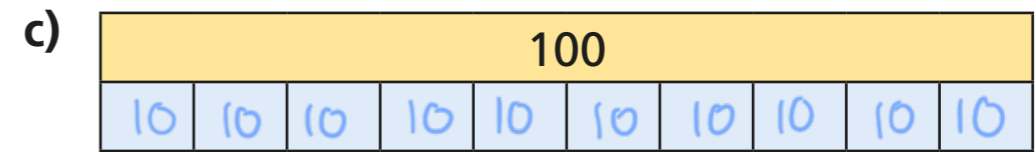
2 Complete the multiplication fact to match the bar model.



$$\boxed{4} \times \boxed{10} = \boxed{40}$$

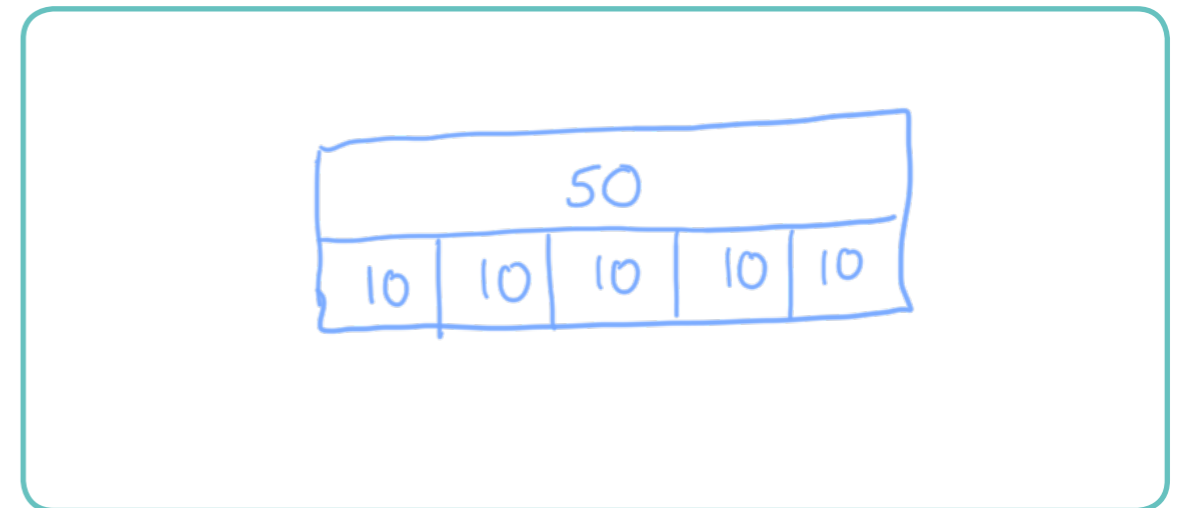


$$\boxed{7} \times \boxed{10} = \boxed{70}$$



$$\boxed{10} \times \boxed{10} = \boxed{100}$$

3 Draw a bar model to represent  $5 \times 10$



4 a) Complete the number line.



b) Which times-table does the number line show?

Tick your answer.

10 times-table  5 times-table  1 times-table

How do you know?



5 Complete the number sentences.

a)  $2 \times 10 = \boxed{20}$

f)  $\boxed{100} = 10 \times 10$

b)  $\boxed{70} = 7 \times 10$

g)  $10 \times \boxed{1} = 10$

c)  $10 \times 4 = \boxed{40}$

h)  $10 \times 0 = \boxed{0}$

d)  $10 \times \boxed{11} = 110$

i)  $30 = 10 \times \boxed{3}$

e)  $80 = \boxed{8} \times 10$

j)  $\boxed{9} \times 10 = 90$

6 Eva is 7 years old.



Her gran is 10 times older.

How old is Eva's gran?

Eva's gran is  $\boxed{70}$  years old.

7 Four children each have some money.

Teddy has this money.



Dora


I have twice as much money as Teddy.

I have five times as much money as Teddy.



Jack

I have ten times as much money as Dora.



Rosie

How much money do they each have?

Teddy has  $\boxed{4}$  p

Dora has  $\boxed{8}$  p

Jack has  $\boxed{20}$  p

Rosie has  $\boxed{80}$  p